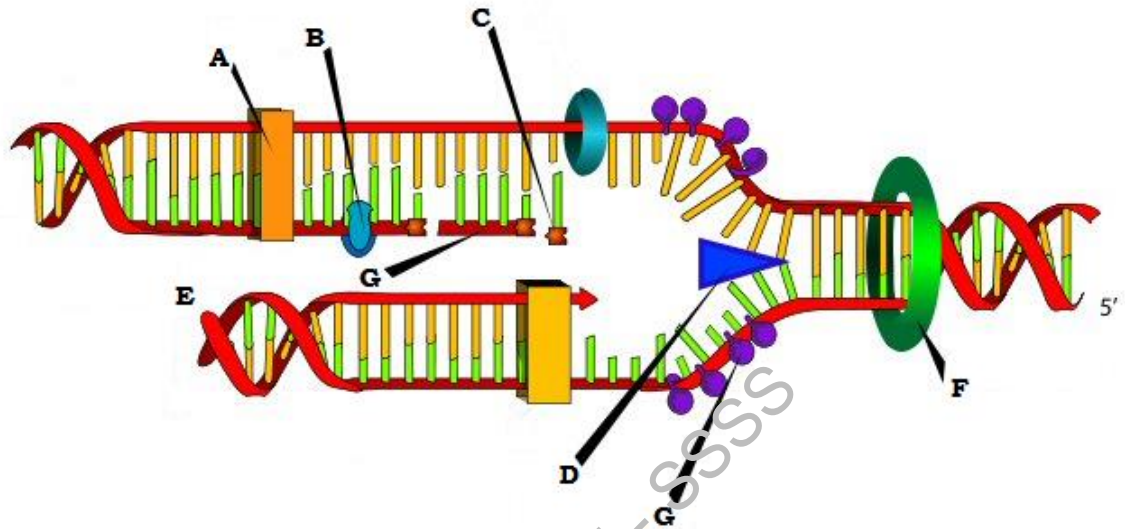


Name: \_\_\_\_\_


Score: \_\_\_\_\_ / 119

Use the diagram to answer questions 1-6.



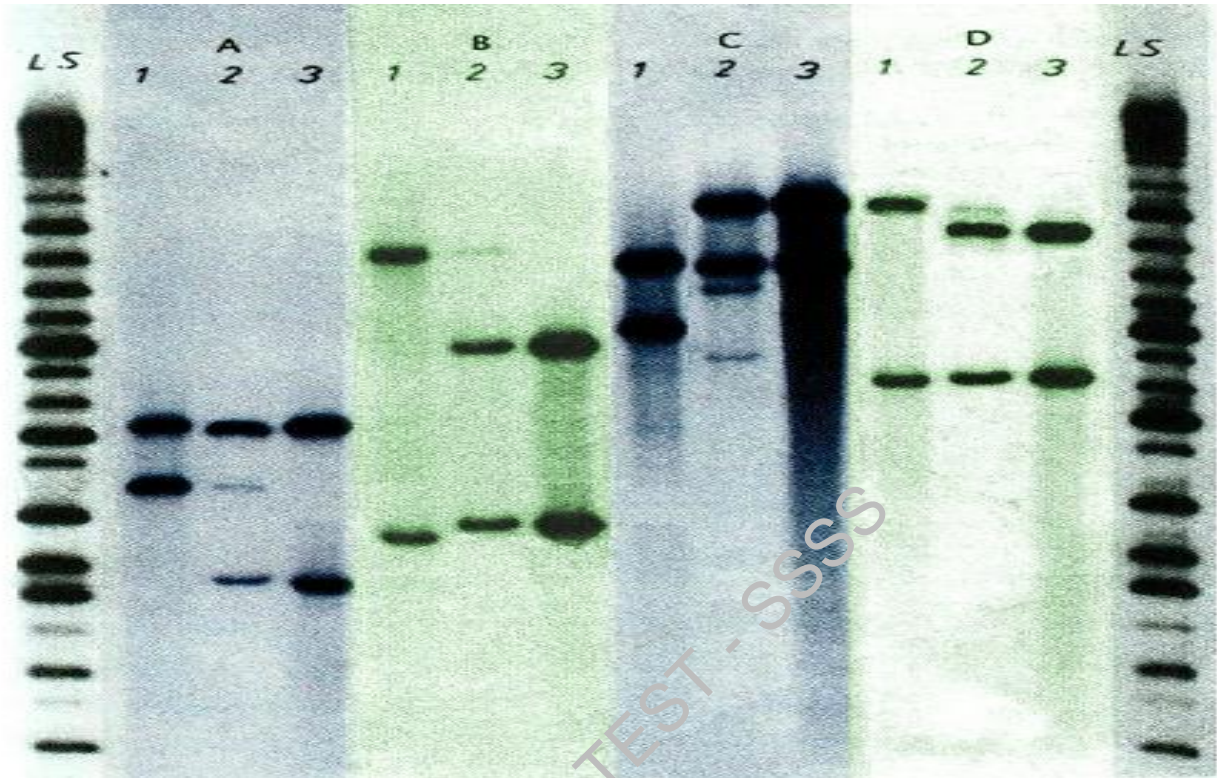
1. What is the polarity of the DNA strand at site E? [1pt] \_\_\_\_\_
2. What is the name and purpose of enzyme D? [2pt] \_\_\_\_\_  
\_\_\_\_\_
3. The structure labelled G is an Okazaki fragment. Is the upper strand the leading strand or the lagging strand? [2pt] \_\_\_\_\_
4. What kind of pentose sugar is present in the nucleotide labelled C? [4pt] \_\_\_\_\_
5. What is enzyme F? [2pt] \_\_\_\_\_
6. What is the function of the protein labelled G? [4pt] \_\_\_\_\_  
\_\_\_\_\_

Use the result of an electrophoresis assay given to answer the following two questions.



7. What method of DNA sequencing was used to obtain this result? [2pt]
  - A. Ion Torrent sequencing
  - B. Sequencing by ligation
  - C. Chain termination/Sanger sequencing
  
8. What DNA sequence can be determined for the coding strand (include polarity)? [4pt]  
\_\_\_\_\_
  
9. What are the three steps of a PCR? [3pt] \_\_\_\_\_  
\_\_\_\_\_
  
10. What temperatures, in Celsius, correspond to each step of PCR? [3pt] \_\_\_\_\_  
\_\_\_\_\_
  
11. Which of the following scientists were involved in the discovery of DNA's semiconservative replication? [2pt]
  - A. Alfred Hershey
  - B. Rosalind Franklin
  - C. Matthew Meselson
  - D. Frederick Sanger
  
12. Ultraviolet radiation can act as a mutagen in which of the following ways? [2pt]
  - A. It creates thymine dimers.
  - B. It synthesized benzo[a]pyrene.
  - C. It creates adenine dimers.
  - D. None of the above.

The DNA fingerprints in the image below are used for RFLP analysis. Use the image to answer questions 13 and 14.



13. The lanes in group A are used as a paternity test. If lane 3 is the DNA from a child, is it possible for the individuals for lanes 1 and 2 to be the parents? [2pt] \_\_\_\_\_
14. In group B, lanes 2 and 3 are identical. Is there more or less DNA in lane 1 relative to the other two lanes? [2pt] \_\_\_\_\_
15. What does RFLP stand for? [1pt] \_\_\_\_\_

Use the information below to answer questions 16-20.

		Second letter					
		U	C	A	G		
First letter	U	UUU } Phe UUC } UUA } Leu UUG }	UCU } UCC } Ser UCA } UCG }	UAU } Tyr UAC } UAA Stop UAG Stop	UGU } Cys UGC } UGA Stop UGG Trp	U C A G	
	C	CUU } CUC } Leu CUA } CUG }	CCU } CCC } Pro CCA } CCG }	CAU } His CAC } CAA } Gln CAG }	CGU } CGC } Arg CGA } CGG }	U C A G	Third letter
	A	AUU } AUC } Ile AUA } AUG Met	ACU } ACC } Thr ACA } ACG }	AAU } Asn AAC } AAA } Lys AAG }	AGU } Ser AGC } AGA } Arg AGG }	U C A G	
	G	GUU } GUC } Val GUA } GUG }	GCU } GCC } Ala GCA } GCG }	GAU } Asp GAC } GAA } Glu GAG }	GGU } GGC } Gly GGA } GGG }	U C A G	

In the alien flower species *Pretty pretty*, one protein is responsible for attaching tiny, brittle fibers to the plant's stem. The amino end of the protein attaches to cell walls of the outermost layer of cells on the stem, and the carboxyl end attaches to the fiber. The DNA sequence for the protein is:

3'-TACCAGCGCGTTGATGGATCAATT-5'

If an adenine nucleotide replaced a guanine such that the sequence was changed to:

3' - TACCAGCGCATTGATGGATCAATT - 5'

then:

16. What is the amino acid sequence of the normal protein? [2pt] \_\_\_\_\_

\_\_\_\_\_

17. What is the amino acid sequence of the mutant protein? [2pt] \_\_\_\_\_

\_\_\_\_\_

18. How would the protein be affected by the mutation? [2pt]

\_\_\_\_\_

19. What kind of mutation is this? [3pt] \_\_\_\_\_

20. How would this affect protein function? [3pt] \_\_\_\_\_

\_\_\_\_\_

21. In the Lac operon, which molecule acts as the inducer? [2pt] \_\_\_\_\_

22. In the Lac operon, as glucose levels rise, how is lactose metabolism affected? [3pt] \_\_\_\_\_

\_\_\_\_\_

23. In the Trp operon, which molecule acts as the corepressor? [2pt] \_\_\_\_\_

24. Four nucleic acid samples are analyzed to determine the percentages of the nucleotides they contain. Survey the data in the table below and determine which samples are DNA and which are RNA, and specify whether each sample is double-stranded or single-stranded. Justify each answer. (Source: *Genetic Analysis* by Mark F. Sanders) [8pt]

	A	G	T	U	C
Sample 1	22%	28%	22%	0	28%
Sample 2	30%	30%	0	20%	20%
Sample 3	18%	32%	0	18%	32%
Sample 4	29%	29%	21%	0	21%

---



---



---



---



---



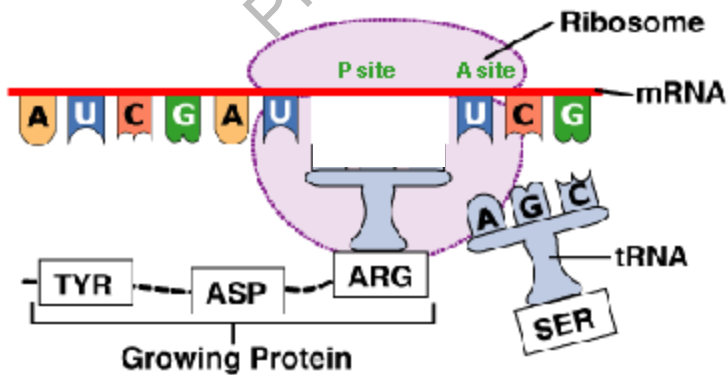
---

Use the DNA sequence to answer questions 24-26.

5' - ATGCCAGTCACTGACTTG - 3'  
 3' - TACGGTCAGTGACTGAAC - 5'

25. How many phosphodiester bonds are needed for this segment of DNA? [1pt] \_\_\_\_\_
26. How many hydrogen bonds are there in this segment? [2pt] \_\_\_\_\_
27. If the lower strand is used to create a polypeptide, how many peptide bonds will there be in the resulting polypeptide fragment? [2pt] \_\_\_\_\_

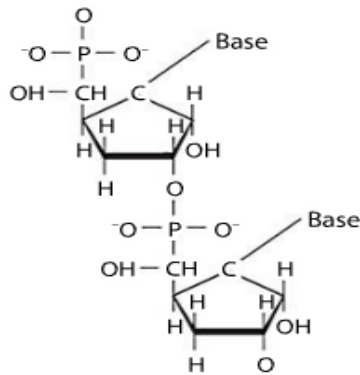
Use the figure to answer the following two questions.



28. What process is illustrated in the figure? [1pt] \_\_\_\_\_
29. From 5' to 3', what is the sequence of the blocked portion mRNA? [3pt] \_\_\_\_\_

30. What enzyme binds amino acids to specific tRNA molecules? [2pt] \_\_\_\_\_

Use the following information to answer question 31: You are participating in a study group preparing for an upcoming biology exam. The group decides that each person should draw the structure of two DNA nucleotides joined in a single strand. The figures are drawn and exchanged for correction. You receive the drawing below to correct. (Source: Genetic Analysis by Mark F. Sanders)



31. Identify and correct five things that are wrong in the depiction of the nucleotides. [10pt] \_\_\_\_\_

\_\_\_\_\_

\_\_\_\_\_

\_\_\_\_\_

\_\_\_\_\_

\_\_\_\_\_

Match the laboratory procedures in questions 32-37 with their descriptions. [1pt each]

- A. A type of hybridization that uses DNA or RNA probes to localize a specific DNA or RNA strand in tissues (e.g. *Drosophila* embryos).
- B. A technique used to study gene expression by detection of RNA.
- C. A technique used to study DNA-binding proteins and their ability to bind to specific nucleotide sequences.
- D. A technique used to detect specific DNA sequences within DNA samples.
- E. A collection of microscopic DNA spots attached to a solid surface
- F. An analytical technique used to detect specific proteins in a given tissue sample.

32. Southern blot: \_\_\_\_\_

33. Northern blot: \_\_\_\_\_

34. Western blot: \_\_\_\_\_

35. Southwestern blot: \_\_\_\_\_

36. *in situ* hybridization: \_\_\_\_\_

37. DNA microarray: \_\_\_\_\_

38. Describe the function of miRNA. [4pt] \_\_\_\_\_  
\_\_\_\_\_  
\_\_\_\_\_

39. Which of the following enzymes synthesizes cDNA from a single strand of RNA? [2pt]

- A. reverse transcriptase
- B. DNA ligase
- C. aminoacyl tRNA synthetase
- D. nucleoprotein kinase III

40. For a proteasome to degrade a protein, what molecule must first bind to the protein? [2pt]

Questions 41-45 are true/false. [1pt]

41. miRNA is used to control gene expression. \_\_\_\_\_

42. In eukaryotes, after transcription, mRNA goes directly to ribosomes for translation. \_\_\_\_\_

43. If a researcher introduced radioactive cytosine into a cell culture, after one round of replication, all bacteria would be radioactive. \_\_\_\_\_

44. In prokaryotes, mitochondrial DNA is inherited from the father. \_\_\_\_\_

45. Eukaryotes control levels of gene expression through histone acetylation and DNA methylation. \_\_\_\_\_

46. A mutation changes a single base in a codon so that the amino acid it codes for changes from Asp to Gly. What single nucleotide changes could cause this? There are two; write both the starting and the altered codons (Source: *Genetic Analysis* by Mark F. Sanders). [4pt] \_\_\_\_\_  
\_\_\_\_\_  
\_\_\_\_\_

47. What technique did James Watson and Francis Crick (aided by Rosalind Franklin) use to determine the double helix structure of DNA? [2pt]

- A. *in situ* hybridization
- B. X-ray crystallography
- C. phosphodiester-enzyme analysis

48. The negative charge on which part of a DNA nucleotide causes DNA to move towards the positive node during an electrophoresis assay? [2pt] \_\_\_\_\_

49. Which of the following is NOT contained within the spliceosomes that cut out introns during post-transcriptional mRNA processing? [3pt]

- A. snRNA
- B. snRNP
- C. miRNA
- D. ribozymes

50. What does snRNP stand for? [2pt] \_\_\_\_\_

51. Which of the following RNA sequences would form the strongest stem-loop structure? [2pt]

- A. 5' – AGGCUAUAGGGAGCCU – 3'
- B. 5' – AGCGUAUAGGGAGCCU – 3'
- C. 5' – AGGCUAUAGGGAAAAA – 3'
- D. 5' – AGGCTATAGGGAGCCT – 3'

PRACTICE TEST - SSSS